

Şekil Sayı Eşleştirme

×

= 0

▽

= 1

⬠

= 7

△

= 8

○

= 4

→

= 5

+

= 3

□

= 2

☆

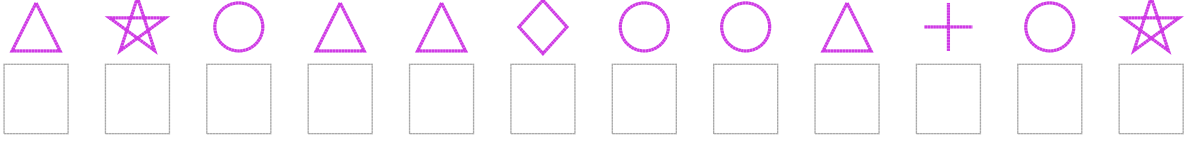
= 6

◇

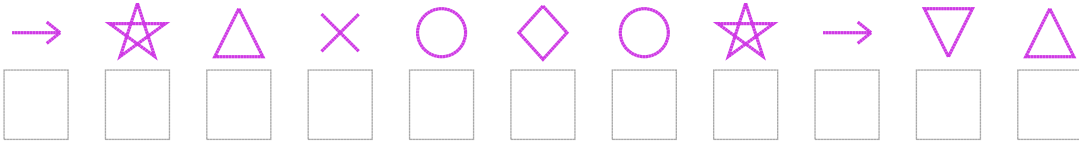
= 9

Aşağıdaki uzun şifreleri hatasız çözerek altlarına yazın:

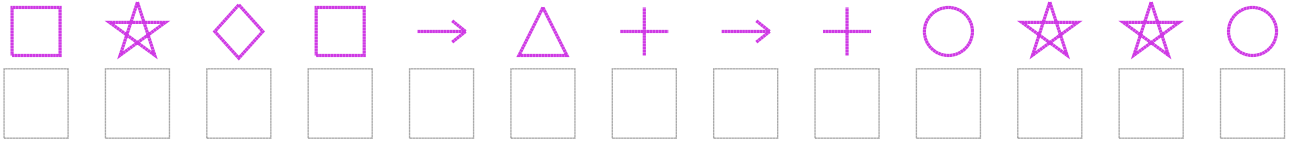
1. Şifre



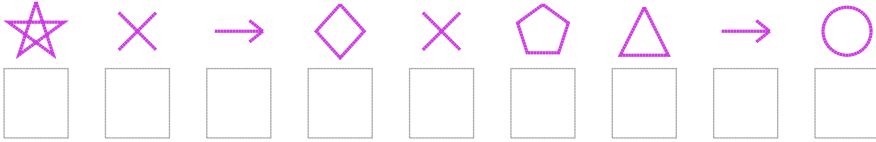
2. Şifre



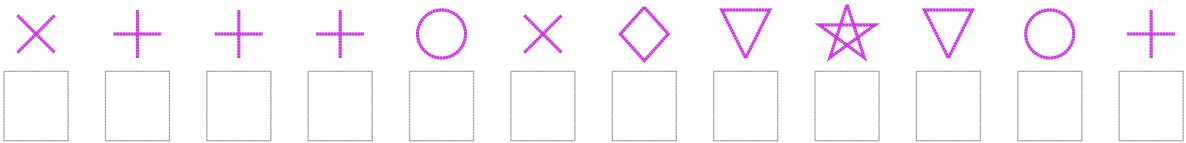
3. Şifre



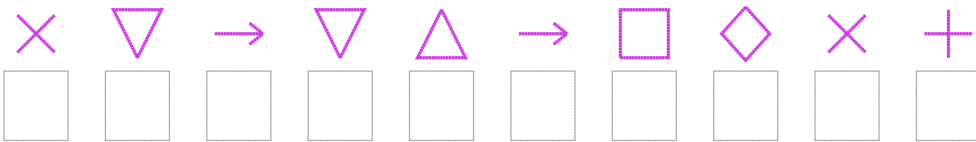
4. Şifre



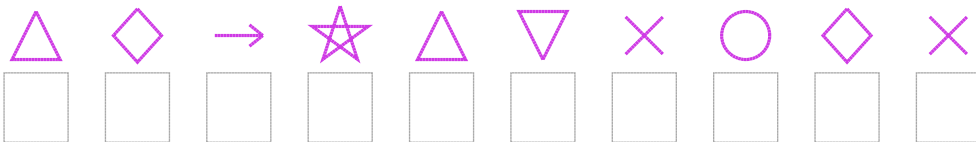
5. Şifre



6. Şifre



7. Şifre



□ BONUS: 6. ve 7. şifrenin üçüncü rakamının toplamı kaçtır?

Cevap Anahtarı

1. Şifre: 864889448346

2. Şifre: 56804946518

3. Şifre: 2692583534664

4. Şifre: 605907854

5. Şifre: 033340916143

6. Şifre: 0151852903

7. Şifre: 8956810490

□ Bonus Soru Cevabı: 10